

DOWNLOAD PDF DOCUMENT



GEOMETRY CHAPTER 12 MID...

DOWNLOAD DOCUMENT NOW

Updated: 10/14/2017

DISCLAIMER:

BE-FIRST.CO uses the following geometry chapter 12 mid quiz answers book available for free PDF download which is also related with

GEOMETRY CHAPTER 12 MID QUIZ ANSWERS

We offer you to download geometry chapter 12 mid quiz answers as well as hundreds of other books in PDF format for free. The only condition is to pass a registration. You should click on the link below and then answer simple questions. It will not take more than a couple of minutes. Bear in mind that it is necessary to make the process of using our digital library more comfortable to you and other users; registration helps to devoid of hackers' attacks that are an ordinary thing on the Internet. Therefore, when you need geometry chapter 12 mid quiz answers or your friend is looking for a good online library to download geometry chapter 12 mid quiz answers for free, take advantage of our bargain and register now. When you need geometry chapter 12 mid quiz answers or other eBooks, just register on our site once and you will get a free access to a treasury of eBooks. You will be able to download geometry chapter 12 mid quiz answers on your device any time.

DOWNLOAD NOW

DOWNLOAD PDF DOCUMENT

DOWNLOAD PDF DOCUMENT

GEOMETRY CHAPTER 12 MID...

[MICROSOFT WORD - CHAPTER 2 TEST REVIEW ANSWERS.DOCX](#)

Honors Geometry Chapter 2 Test Review Question Answers 1. Given: $BA \perp AT$ $(51 - x) + (y + 9) = 180$ Find: $m\angle MAT$ $y = 120 + x$ $(y + 9) + (x + y) = 90$ $B \perp x + 2y = 81$ $x + 2(120 + x) = 81$ $x + 240 + 2x = 81$ $3x = -159$ M $51 - x + y + 9 = 180$ A $x + y = 120$ $T \perp y = 120 + (-53) = 67$ $m\angle MAT = 180 - (x + y) = 180 - 14 = 166$ 2. A certain angle is 39 less than 2 times its complement. Find its supplement. $x = 2(90 - x) - 39$

File name: Chapter 2 Test Review Answers.pdf

[Download now or Read Online](#)

[APEX GEOMETRY SEMESTER 1 QUIZ ANSWERS](#)

Apr 23 2014 - Apexvs Cheats 1 2 3 4 5 Apexvs Geometry Sem 2 Answer Quiz Documents Does anyone have the answers to Geometry semester 2 apex answers Anybody know where i can get the answer key for my algebra Followsubscribe Answers To Apex Pre Calculus Semester 1 49 5 24 900 000 Apex Algebra 2 Semester 2 Answer Key DownloadPDF 1 Apex Student Tutorial Welcome to Apex 2 Welcome to Apex Apex Learning is...

File name:

[Download now or Read Online](#)

[CHAPTER 4 MID-CHAPTER REVIEW EXTRA PRACTICE](#)

STUDENT BOOK PAGES 225-226 5. Determine the values of a, h, and k that make the equation true. 1. For each function, state the vertex, its maximum or a) $4x^2 + 16x + 3 = a(x + h)^2 + k$ minimum value, and its axis of symmetry. y b) $2x^2 + 14x + 4 = a(x + h)^2 + k$ a) $f(x) = (x + 2)^2 + 3$ c) $3x^2 + 15x + 8 = a(x + h)^2 + k$ b) $f(x) = 2(x + 6)^2 + 5$ 1 c) $f(x) = 3(x + 4)^2 + 1$ d) $x^2 + 6x + 2 = a(x + h)^2 + k$

File name: (Gr11UC) Chapter 4 Mid Review and Answers.pdf

[Download now or Read Online](#)

[MICROSOFT WORD - CHAPTER 5 STUDY GUIDE ANSWERS](#)

Name Date STUDY GUIDE CHAPTER 5 ELECTRICITY AND MAGNETISM 1) ASSOCIATE ELEMENTARY PARTICLES WITH THEIR ELECTRICAL CHARGE Scientists now know that an atom is composed of even smaller particles of matter: protons, neutrons and electrons. The following illustration represents the distribution of these elementary particles inside the atom: Figure 1: SUBATOMIC PARTICLES Electrical charge is a property of pr...

File name: chapter 5 study guide answers.pdf





















[Download now or Read Online](#)

DOWNLOAD PDF DOCUMENT

DOWNLOAD PDF DOCUMENT

Here below another book similar with:

GEOMETRY CHAPTER 12 MID...

-  [geometry chapter 12 mid quiz answers](#)
-  [chapter 6 mid test algebra 2](#)
-  [paper 2 physics mid year exam 2012](#)
-  [volvo mid 137 code](#)
-  [quiz 1 geometry answers form](#)
-  [glencoe geometry chapter 7 test form 2a answers](#)
-  [discovering geometry answers chapter 4](#)
-  [chapter 2 test geometry answers](#)
-  [holt geometry geometry answer key](#)
-  [ionic and metallic bonding chapter quiz answers](#)
-  [chapter 6 section 2 the roman empire section quiz answers](#)
-  [lord of the flies chapter 4 quiz answers](#)
-  [microeconomics chapter 6 quiz answers](#)
-  [geometry vocabulary quiz and answer key](#)
-  [discovering geometry quiz part](#)
-  [geometry chapter 4 test answer key](#)
-  [chapter 11 test geometry](#)
-  [geometry chapter 1 study guide](#)
-  [chapter 5 unit 6 geometry](#)
-  [mcdougal littell geometry chapter 4 resource book](#)

DOWNLOAD PDF DOCUMENT