

# DOWNLOAD PDF DOCUMENT



## GEOMETRY THE TRIANGLE M...

**DOWNLOAD DOCUMENT NOW**

**Updated:** 10/11/2017

---

**DISCLAIMER:**

BE-FIRST.CO uses the following geometry the triangle midsegment theorem answers book available for free PDF download which is also related with

**GEOMETRY THE TRIANGLE MIDSEGMENT THEOREM ANSWERS**

geometry the triangle midsegment theorem answers can be easily downloaded from our library. Don't you believe? It is completely free. You just have to register on our site - click on the link below and answer simple questions. It will provide you for free access to geometry the triangle midsegment theorem answers and other eBooks. We ask you to pass a registration because of hard hackers' attacks that knock out of service our library and prevent our users from downloading geometry the triangle midsegment theorem answers as well as other books when it is necessary. When pass the registration, you can be sure of free and unlimited access to geometry the triangle midsegment theorem answers and lots of other PDF data. Files can be downloaded on your device when you want. Therefore, if you still need geometry the triangle midsegment theorem answers and cannot download it from other sites, register on our site and get a free access to a rich collection of eBooks right now. Save your time and efforts.

---

**DOWNLOAD NOW**

# DOWNLOAD PDF DOCUMENT

# DOWNLOAD PDF DOCUMENT

## GEOMETRY THE TRIANGLE M...

### PYTHAGOREAN THEOREM

Answers Math Bits Free PDF eBook Download: Pythagorean Theorem Answers Math Bits Download or Read Online eBook pythagorean theorem answers math bits in PDF Format From The Best User Guide DatabaseGrade 6 Math Circles. Winter 2013. Pythagorean Theorem. Pythagorean Theorem. The Pythagorean theorem is an extremely popular theorem that is used a lot Lesson 2: Pythagorean Theorem. Teacher Blackline #1....

**File name:** pythagorean-theorem-answers-math-bits.pdf

[Download now or Read Online](#)

### MICROSOFT WORD - THROWDOWN IN THE TRIANGLE - 2014 EVENTS.DOCX

2014 EventsEVENT 17 Minute AMRAP: 5 Squat snatches (95,65) 5 Bar facing burpeesOne athlete will be working at a time. Teams must complete the reps in the order written.Teams may split up the reps between each team member, as desired.Squat Snatch: For the squat snatch, the barbell will move from the ground to overhead in one motion with the athlete catching the barbell overhead in a full squat (hip...

**File name:** Throwdown-in-the-Triangle-2014-Events.pdf

[Download now or Read Online](#)

### DBQ 12 THE INDUSTRIAL REVOLUTION BEGINNINGS ANSWERS - BING

dbq 12 the industrial revolution beginnings answers pdfFREE PDF DOWNLOADNOWdbq 12 The Industrial Revolution Beginnings Answer Related searcheswww.triciajoy.com subject dbq 12 the industrial revolutionDBQ Industrial Revolution PDFADVANCED PLACEMENT WORLD HISTORY COURSE SYLLABUS Beginnings to 600BCE Period 2 Organization and Continuity over Time and DBQ 12 Evaluate In DBQ 11 the Industrial BoomAdam ...

**File name:**

[Download now or Read Online](#)

### GEOMETRY9

Triangle Congruence Proof Practice 1) Given:  $AB \parallel CD$ ;  $AC \parallel BD$  Prove:  $\triangle ABC \cong \triangle DCB$  1)  $\angle A \cong \angle D$ ;  $\angle C \cong \angle B$ ;  $AC \cong DB$  2)  $\angle A \cong \angle D$ ;  $\angle C \cong \angle B$ ;  $AC \cong DB$  3)  $\angle A \cong \angle D$ ;  $\angle C \cong \angle B$ ;  $AC \cong DB$  4)  $\angle A \cong \angle D$ ;  $\angle C \cong \angle B$ ;  $AC \cong DB$  Given:  $LA \cong LE$ ;  $C$  is the midpt. of  $BD$  Prove:  $\triangle ABC \cong \triangle EDC$  1)  $\angle A \cong \angle E$ ;  $AC \cong EC$ ;  $\angle C \cong \angle C$  2)  $\angle A \cong \angle E$ ;  $AC \cong EC$ ;  $\angle C \cong \angle C$  3)  $\angle A \cong \angle E$ ;  $AC \cong EC$ ;  $\angle C \cong \angle C$  4)  $\angle A \cong \angle E$ ;  $AC \cong EC$ ;  $\angle C \cong \angle C$

**File name:** Triangle Congruency Proof Answers.pdf

[Download now or Read Online](#)





















# DOWNLOAD PDF DOCUMENT

# DOWNLOAD PDF DOCUMENT

Here below another book similar with:

## GEOMETRY THE TRIANGLE M...

---

-  [geometry the triangle midsegment theorem answers](#)
-  [holt geometry practice b answers triangle congruence](#)
-  [kirszbraun theorem](#)
-  [proving the pythagorean theorem and answer key](#)
-  [10 5 the pythagorean theorem answer key](#)
-  [pythagorean theorem exam and answer key](#)
-  [pythagorean theorem fractions](#)
-  [right triangle trigonometry answers](#)
-  [red triangle golf logo list](#)
-  [greedy triangle](#)
-  [greedy triangle activities first grade](#)
-  [weisbach triangle correlation method](#)
-  [special right triangle quiz answer](#)
-  [velocity triangle diagram for impulse turbine](#)
-  [the triangle shirtwaist factory](#)
-  [holt geometry geometry answer key](#)
-  [answers holt geometry 10 3 practice answers](#)
-  [geometry moise downs answers](#)
-  [apex geometry answers unit 2](#)
-  [geometry common core pearson work answers](#)

# DOWNLOAD PDF DOCUMENT