

DOWNLOAD PDF DOCUMENT



GLENCOE GEOMETRY CHAPTE...

DOWNLOAD DOCUMENT NOW

Updated: 10/27/2017

DISCLAIMER:

BE-FIRST.CO uses the following glencoe geometry chapter 7 test form 2a answers book available for free PDF download which is also related with

GLENCOE GEOMETRY CHAPTER 7 TEST FORM 2A ANSWERS

We offer you to download glencoe geometry chapter 7 test form 2a answers as well as hundreds of other books in PDF format for free. The only condition is to pass a registration. You should click on the link below and then answer simple questions. It will not take more than a couple of minutes. Bear in mind that it is necessary to make the process of using our digital library more comfortable to you and other users; registration helps to devoid of hackers' attacks that are an ordinary thing on the Internet. Therefore, when you need glencoe geometry chapter 7 test form 2a answers or your friend is looking for a good online library to download glencoe geometry chapter 7 test form 2a answers for free, take advantage of our bargain and register now. When you need glencoe geometry chapter 7 test form 2a answers or other eBooks, just register on our site once and you will get a free access to a treasury of eBooks. You will be able to download glencoe geometry chapter 7 test form 2a answers on your device any time.

DOWNLOAD NOW

DOWNLOAD PDF DOCUMENT

DOWNLOAD PDF DOCUMENT

GLENCOE GEOMETRY CHAPTE...

[MICROSOFT WORD - CHAPTER 11 TEST REVIEW QUESTION ANSWERS.DOCX](#)

Honors Geometry Chapter 11 Test Review Question Answers 1. Find the area of an equilateral triangle that has sides that measure 8 7 . s2 3 AEqu. = 4 (8 7)2 3 448 3 = = = (112 3) u2 4 4 2. A rotor of a Wankel automotive engine has the geometric shape shown. The center of each arc is the opposite vertex of the equilateral triangle. a. Find the figure s area a. A = A + 3(ASegment) b. Find the figur...

File name: Chapter 11 Test Review Question Answers.pdf
[Download now or Read Online](#)

[IB CHAPTER 8 TEST FORM 2A DO NOT WRITE ON TEST](#)

For any credit show all work on a separate sheet of paper for all problems. 13.14. IB Chapter 8 Test Free Response Name: Date; Per: Answer each question on a separate sheet of paper. For each problem do the following: a. Copy or draw a figure. Mark the figure up with the given information. b. Show all calculations. c. Make sure your final answer has the correct units.1.2.3.4.5. 6. ????.Bonus:a.b. ...

File name: Chapter 8 Test Form 2A including Free Response IB.pdf
[Download now or Read Online](#)

[MICROSOFT WORD - CHAPTER 2 TEST REVIEW ANSWERS.DOCX](#)

Honors Geometry Chapter 2 Test Review Question Answers 1. Given: BA ? AT (51 - x) + (y + 9) = 180 Find: m?MAT ? y = 120 + x (y + 9) + (x + y) = 90 B ? x + 2y = 81 x + 2(120 + x) = 81 ? x + 240 + 2x = 81 ? 3x = -159 M 51-x y+9 N A x+y ? x = -53 T ? y = 120 + (-53) = 67 ? m?MAT = 180 - (x + y) = 180 - 14 = 166 2. A certain angle is 39 less than 2 times its complement. Find its supplement. x = 2(90 -...

File name: Chapter 2 Test Review Answers.pdf
[Download now or Read Online](#)

[GEOMETRY - LAYSTROM - 6A - REVIEW FOR CHAPTER 8 TEST](#)

Geometry - Laystrom - 6A Name Review for Chapter 8 Test Period q 1210j113V yK5uHtraU OSUo4fctFwPa1rhev kLlLxCF.v G KAElllu vrwiEgOhFtMsO zrlE0sgeHrZvKeYdy.5 Find the value of x. 1) 2) 22 (2x + 1) 61 (6x + 2) 3) (23 + x) (2x + 1) Solve for x. 4) U V 99 7 x + 11 81 99 T S Find the measure of each angle indicated. 5) m?T Q T 14 x + 8 80 7x + 9 95 S R Classify each triangle by its angles and sides. 6...





















File name: Geometry - Laystrom - 6A - Review for Chapter 8 Test.pdf
[Download now or Read Online](#)

DOWNLOAD PDF DOCUMENT

DOWNLOAD PDF DOCUMENT

Here below another book similar with:

GLENCOE GEOMETRY CHAPTE...

-  [glencoe geometry chapter 7 test form 2a answers](#)
-  [answers for glencoe geometry](#)
-  [glencoe mathematics geometry workbook answers](#)
-  [glencoe chemistry chapter 13 assessment answers](#)
-  [geometry test answers prentice hall form](#)
-  [glencoe geometry practice work answer key](#)
-  [glencoe mcgraw hill geometry concepts and applications workbook answer key](#)
-  [chapter 7 resource masters advanced mathematical concepts precalculus with applications glencoe advanced mathematical concepts](#)
-  [chapter 21 review glencoe physics principles problems](#)
-  [chapter 2 test geometry answers](#)
-  [quiz 1 geometry answers form](#)
-  [chapter 9 test form b](#)
-  [geometry chapter 4 test answer key](#)
-  [chapter 11 test geometry](#)
-  [intro to business glencoe answers](#)
-  [glencoe spanish buen viaje level 2 workbook answers](#)
-  [animal farm glencoe study guide answers](#)
-  [geometry chapter 12 mid quiz answers](#)
-  [discovering geometry answers chapter 4](#)
-  [holt geometry geometry answer key](#)

DOWNLOAD PDF DOCUMENT